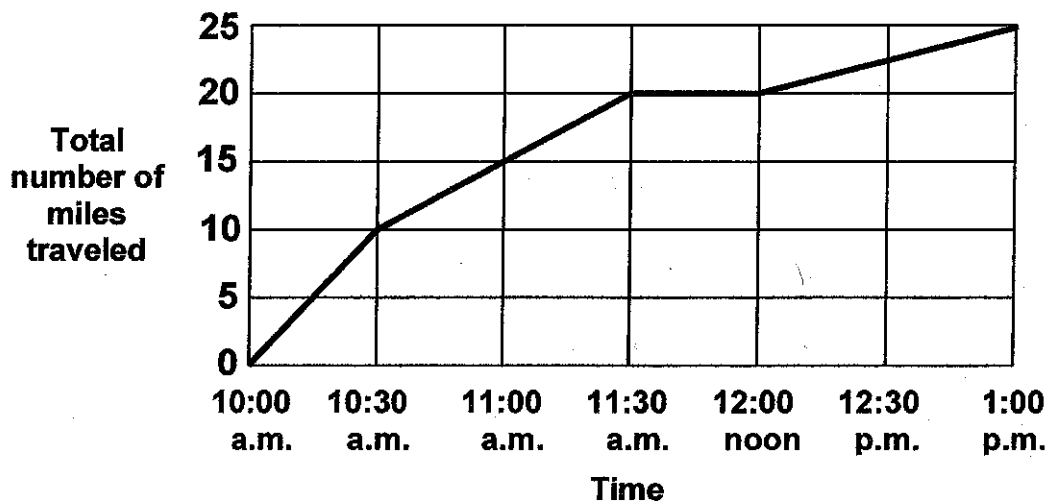


Bike Ride

Selina and Jack went for a bike ride today.

They made this graph of their bike ride.



1. How many miles did they travel in all? _____ miles

2. How long did their bike ride take? _____ hours

3. When were they cycling the fastest?
Explain your answer. _____

4. What does the graph show that they did between 11:30 a.m. and 12 noon?

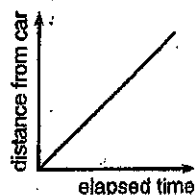
Explain your answer. _____

5. What was their speed between 12 noon and 1 p.m.? _____ miles an hour

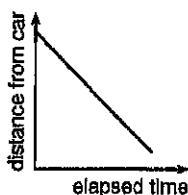
LESSON 3

For each set of graphs, choose one that best matches the situation. Write a sentence explaining why you chose the particular graph you did.

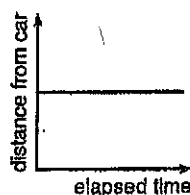
1. Hugo walked at a steady pace away from the car.



a.



b.

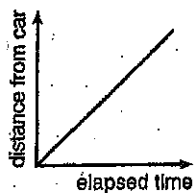


c.



d.

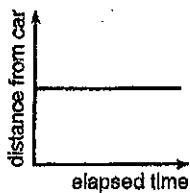
2. Mary walked at a steady pace toward the car.



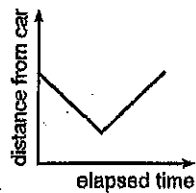
a.



b.

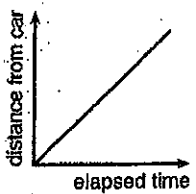


c.



d.

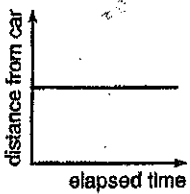
3. Chris stood at a distance from the car.



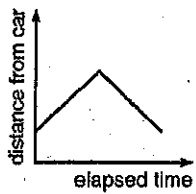
a.



b.

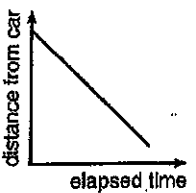


c.

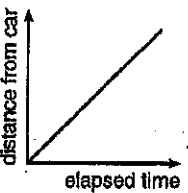


d.

4. Nancy first walked toward the car and then away from it.



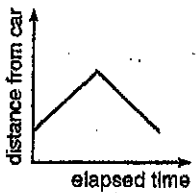
a.



b.



c.



d.